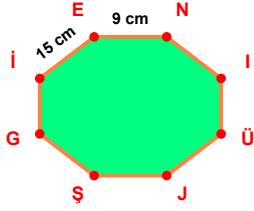
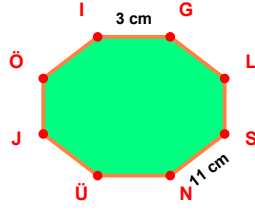


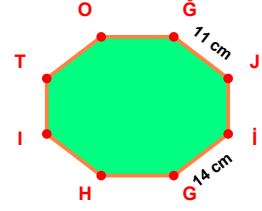
SORU: Aşağıdaki şekillerde verilen, kenar uzunlukları farklarını bulunuz.



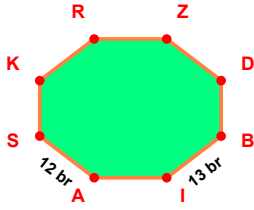
$$|IE| - |EN| = \dots\dots$$



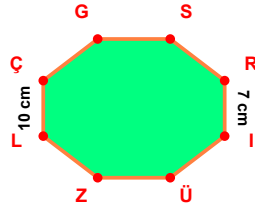
$$|SN| - |IG| = \dots\dots$$



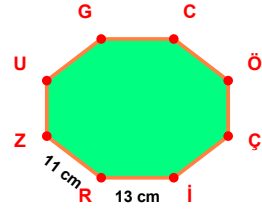
$$|GI| - |ĞJ| = \dots\dots$$



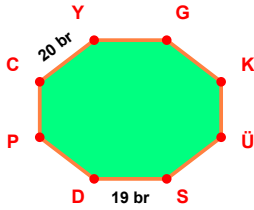
$$|BI| - |AS| = \dots\dots$$



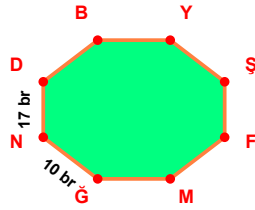
$$|LC| - |RI| = \dots\dots$$



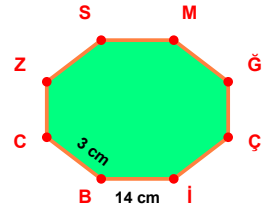
$$|RI| - |RZ| = \dots\dots$$



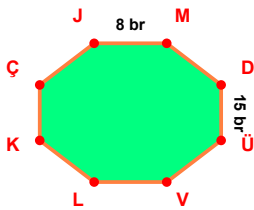
$$|CY| - |SD| = \dots\dots$$



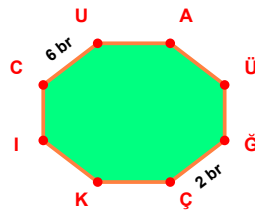
$$|ND| - |GN| = \dots\dots$$



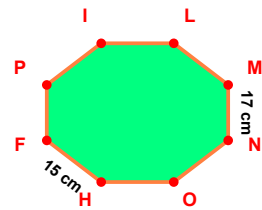
$$|IB| - |BC| = \dots\dots$$



$$|DÜ| - |JM| = \dots\dots$$

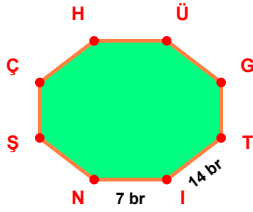


$$|CU| - |ĞÇ| = \dots\dots$$

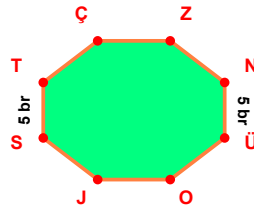


$$|MN| - |HF| = \dots\dots$$

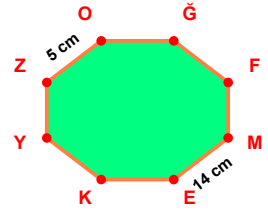
SORU: Aşağıdaki şekillerde verilen, kenar uzunlukları farklarını bulunuz.



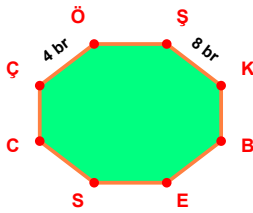
$$|TI| - |IN| = \dots\dots\dots$$



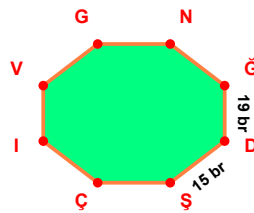
$$|ST| - |NÜ| = \dots\dots\dots$$



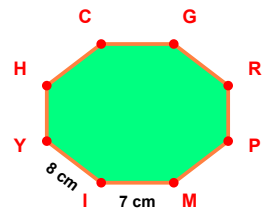
$$|ME| - |ZO| = \dots\dots\dots$$



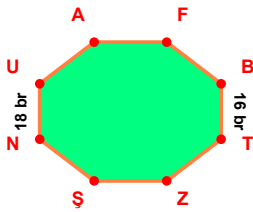
$$|ŞK| - |ÇÖ| = \dots\dots\dots$$



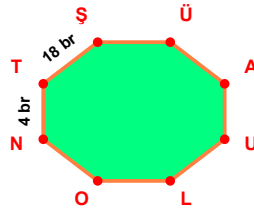
$$|ĞD| - |DŞ| = \dots\dots\dots$$



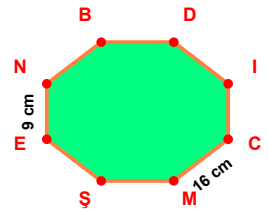
$$|IY| - |MI| = \dots\dots\dots$$



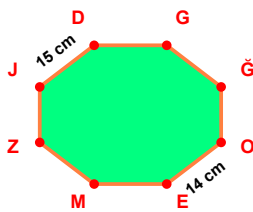
$$|NU| - |BT| = \dots\dots\dots$$



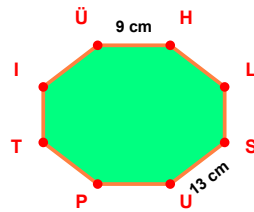
$$|TŞ| - |NT| = \dots\dots\dots$$



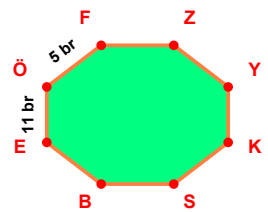
$$|CM| - |EN| = \dots\dots\dots$$



$$|JD| - |OE| = \dots\dots\dots$$



$$|SU| - |ÜH| = \dots\dots\dots$$



$$|EO| - |ÖF| = \dots\dots\dots$$

SÜREÇ ODAKLI DEĞERLENDİRME ÖLÇEĞİ

Doğru Sayısı: / 24

Öğretmen ilgili kutucuğu işaretler.

Geliştirilmeli (0-8)

İyi (9-14)

Çok İyi (15-20)

Mükemmel (21-24)



Hazırlayan:

Bu bölüme sınıfınızın ilgili kazanıma yönelik genel durumuna ilişkin gözlem ve izlenimlerinizi, öğrencilerinizin bu kazanımla ilgili öğrenme eksikliklerini ve bu eksikliklerin giderilmesi amacıyla yaptığınız/yapmayı planladığınız faaliyetleri not edebilirsiniz.

No	Adı - Soyadı	Toplam Puan	Değerlendirme
1			
2			
3			
4			
5			
6			
7			
8			
9			
10			
11			
12			
13			
14			
15			
16			
17			
18			
19			
20			
21			
22			
23			
24			
25			
26			
27			
28			
29			
30			
31			
32			
33			
34			
35			

Hazırlayan: